

Section A memo

Question 1

a) $x^3 + 2x^2 + 4x + 8 = 0$

$$x^2(x+2) + 4(x+2) = 0 \checkmark$$

$$(x+2)(x^2+4) = 0 \checkmark \quad (\text{many other methods})$$

$$x = -2 \checkmark \text{ or } x^2 + 4 = 0$$

$$x^2 = -4$$

$$x = \pm 2i \checkmark \checkmark$$

(5)

b) $xy = 5 + i$

$$(a+bi)(c-i) = 5+i$$

$$ac - ai + bci - bc^2 = 5+i$$

$$ac + b - ai + bci = 5+i$$

$$ac + b = 5 \checkmark \quad -a + bc = 1 \checkmark$$

$$\therefore -a + 3c = 1$$

$$-a + 3c = 1 \checkmark$$

$$a + c = 3 \checkmark$$

$$4c = 4 \checkmark$$

$$c = 1 \checkmark$$

$$\therefore a + 1 = 3$$

$$a = 2 \checkmark$$

(8)

$$x + y = 3 + 2i$$

$$a + bi + c - i = 3 + 2i$$

$$a + c = 3 \checkmark; \quad b - 1 = 2$$

$$\therefore b = 3 \checkmark$$

13 marks

Question 2

$$\frac{x+2}{x^2(x+1)} = \frac{A}{x} + \frac{B}{x^2} + \frac{C}{(x+1)} \quad \checkmark$$

$$C: \frac{1}{1} = 1 \quad \checkmark$$

$$\therefore \frac{Ax(x+1) + B(x+1) + 1(x^2)}{x^2(x+1)}$$

$$\frac{Ax^2 + Ax + Bx + B + x^2}{x^2(x+1)} \quad \checkmark \checkmark$$

$$A+1=0$$

$$\therefore A=-1$$

$$A+B=1$$

$$B=2$$

$$\therefore \frac{x+2}{x^2(x+1)} = -\frac{1}{x} + \frac{2}{x^2} + \frac{1}{x+1} \quad \checkmark \checkmark \checkmark$$

7

7 marks

$$\text{OR} = \frac{-x+2}{x^2} + \frac{1}{x+1}$$

Question 3

$$a) \frac{x^2+1}{3-x} \leq x$$

$$\frac{x^2+1}{3-x} - x \leq 0$$


$$\frac{x^2+1}{3-x} - x$$

$$\frac{x^2+1-x(3-x)}{3-x} \leq 0$$

$$\frac{x^2-3x+x^2+1}{3-x} \leq 0$$

$$\frac{2x^2-3x+1}{(3-x)} \leq 0$$

$$\frac{(2x-1)(x-1)}{(3-x)} \leq 0$$



$$\therefore \underline{\frac{1}{2} \leq x \leq 1} \quad \text{OR} \quad \underline{x > 3} \quad (8)$$

$$\begin{aligned} b) i) \ln 36 &= \ln 6^2 = 2 \ln 6 = 2(\ln 3 + \ln 2) \\ &= 2(1.10 + 0.693) \\ &= 2 \times 1.793 \\ &= \underline{3.586} \end{aligned} \quad (4)$$

$$ii) 4 \ln x - \frac{1}{2} \ln y + \ln z$$

$$= \ln x^4 - \ln \sqrt{y} + \ln z$$

$$= \ln \frac{x^4 \cdot z}{\sqrt{y}} \quad (2)$$

c) 1) TP:

$$x=0$$

$$f(0) = \frac{1}{2} (e^0 + e^0) \checkmark \checkmark$$

$$= 1$$

(2)

\therefore minimum height above ground = 1m

2) Very dangerous to have an electricity cable hanging 1m above ground - people can walk into it. \checkmark (2)

3) $2 = \frac{1}{2} (e^{\frac{d}{1}} + e^{-\frac{d}{1}}) \checkmark$

$$4 = e^d + e^{-d}$$

$$4 = e^d + \frac{1}{e^d}$$

$$4e^d = e^{2d} + 1$$

$$e^{2d} - 4e^d + 1 = 0 \checkmark$$

let $e^d = k$

$$k^2 - 4k + 1 = 0 \checkmark$$

$$k = \frac{-(-4) \pm \sqrt{16 - 4(1)(1)}}{2(1)}$$

$$= \frac{4 \pm \sqrt{12}}{2}$$

$$k = 3,732 \checkmark$$

$$k = 0,2679 \checkmark$$

$$e^d = 0,2679 \dots$$

$$d = -1,316$$

$$\approx -1,32 \checkmark$$

OR $d = \ln 3,732 \dots$

$$\approx 1,32 \checkmark$$

\therefore distance from origin is 1,32m

25 MARKS

(8)

Question 4

a) $f'(2) = -1$ ✓

$f'(0) =$

$$f(x) = x^{1/3} ✓$$
$$\therefore f'(x) = \frac{1}{3} x^{-2/3} ✓$$
$$= \frac{1}{3\sqrt[3]{x^2}} ✓$$

(6)

$$f'(0) = \frac{1}{3\sqrt[3]{0}} ✓ \therefore f'(0) \text{ does not exist.} ✓$$

b) $x=1$ ✓ jump discontinuity (3)

c) $x=0$ $\lim_{x \rightarrow 0^+} f'(x) \neq \lim_{x \rightarrow 0^-} f'(x)$ ✓ \therefore not differentiable. ✓

$x=1$ Not differentiable because not continuous ✓

$x=3$ $\lim_{x \rightarrow 3^+} f'(x) \neq \lim_{x \rightarrow 3^-} f'(x)$ ✓

\therefore not differentiable ✓

(6)

14 marks

Question 5

a) i) $\lim_{x \rightarrow \infty} \frac{5 - 3x - 2x^2}{4x^2 - 12x + 9} \checkmark \div$ thru by x^2

$$= \lim_{x \rightarrow \infty} \frac{\frac{5}{x^2} - \frac{3}{x} - 2}{4 - \frac{12}{x} + \frac{9}{x^2}} \checkmark \checkmark$$

$$= \frac{-2}{4} \checkmark$$

$$= -\frac{1}{2} \checkmark$$

(5)

ii) $\lim_{x \rightarrow 0} \frac{x^2}{\tan 2x \cdot \tan 3x}$

$$= \lim_{x \rightarrow 0} \left(\frac{2x}{2 \tan 2x} \right) \cdot \left(\frac{3x}{3 \tan 3x} \right) \checkmark \checkmark$$

$$= \frac{1}{2} \times \frac{1}{3}$$

$$= \frac{1}{6} \checkmark \checkmark$$

(5)

b) i) $y = \frac{5}{x} (1 + \sqrt{x})$

$$= \frac{5}{x} (1 + x^{1/2})$$

$$= \frac{5}{x} + \frac{5}{x^{1/2}} \checkmark \text{ multiply out}$$

$$= 5x^{-1} + 5x^{-1/2} \checkmark$$

$$\frac{dy}{dx} = -5x^{-2} + \frac{5}{2} x^{-3/2}$$

$$= -\frac{5}{x^2} + \frac{5}{2\sqrt{x^3}} \checkmark$$

(5)

ii) $y = \sqrt{x^2+1} + 4(3x+1)^5$

$$y = (x^2+1)^{1/2} + 4(3x+1)^5$$

$$\frac{dy}{dx} = \frac{1}{2}(x^2+1)^{-1/2} \cdot 2x + 20(3x+1)^4 \cdot 3$$

$$= \frac{x}{\sqrt{x^2+1}} + 60(3x+1)^4 \checkmark$$

(6)

iii) $y = 3x \cdot \cos^3 2x$

$$\frac{dy}{dx} = 3x \cdot 3\cos^2 2x \cdot (-\sin 2x) \cdot 2$$

$$+ \cos^3 2x \cdot 3 \checkmark \checkmark$$

$$= -18x \sin 2x \cdot \cos^2 2x + 3\cos^3 2x \checkmark$$

(6)

$$c) i) \quad x^3 + y^3 = xy$$

$$3x^2 + 3y^2 \frac{dy}{dx} = x \frac{dy}{dx} + y$$

$$3y^2 \frac{dy}{dx} - x \frac{dy}{dx} = y - 3x^2$$

$$\frac{dy}{dx} (3y^2 - x) = y - 3x^2$$

$$\frac{dy}{dx} = \frac{y - 3x^2}{3y^2 - x}$$

7

$$ii) \quad \text{At } (1, 1) \quad \tilde{m} = \frac{1 - 3(1)^2}{3(1)^2 - 1} = \frac{-2}{2} = -1$$

$$\text{eqn of tang} \quad y - 1 = -1(x - 1)$$

$$y - 1 = -x + 1$$

$$y = -x + 2$$

4

$$d) \quad f(x) = \frac{1}{2x^2}$$

$$= \frac{1}{2} x^{-2}$$

$$f'(x) = -x^{-3} = -1 \cdot x^{-3}$$

$$f''(x) = 3x^{-4} = -1 \cdot (-3) x^{-4}$$

$$f'''(x) = -12x^{-5} = -1 \cdot (-3)(-4) x^{-5}$$

$$f^{(4)}(x) = 60x^{-6} = -1 \cdot (-3)(-4)(-5) x^{-6}$$

1, 3, 12, 60

$$f^{(n)}(x) = \frac{(-1)^n (n+1)!}{2} x^{-(n+2)}$$

6

44 marks

Question 6

a) $f(x) = -e^{x+1} + 2$

Cut on X-axis:

$$0 = -e^{x+1} + 2$$

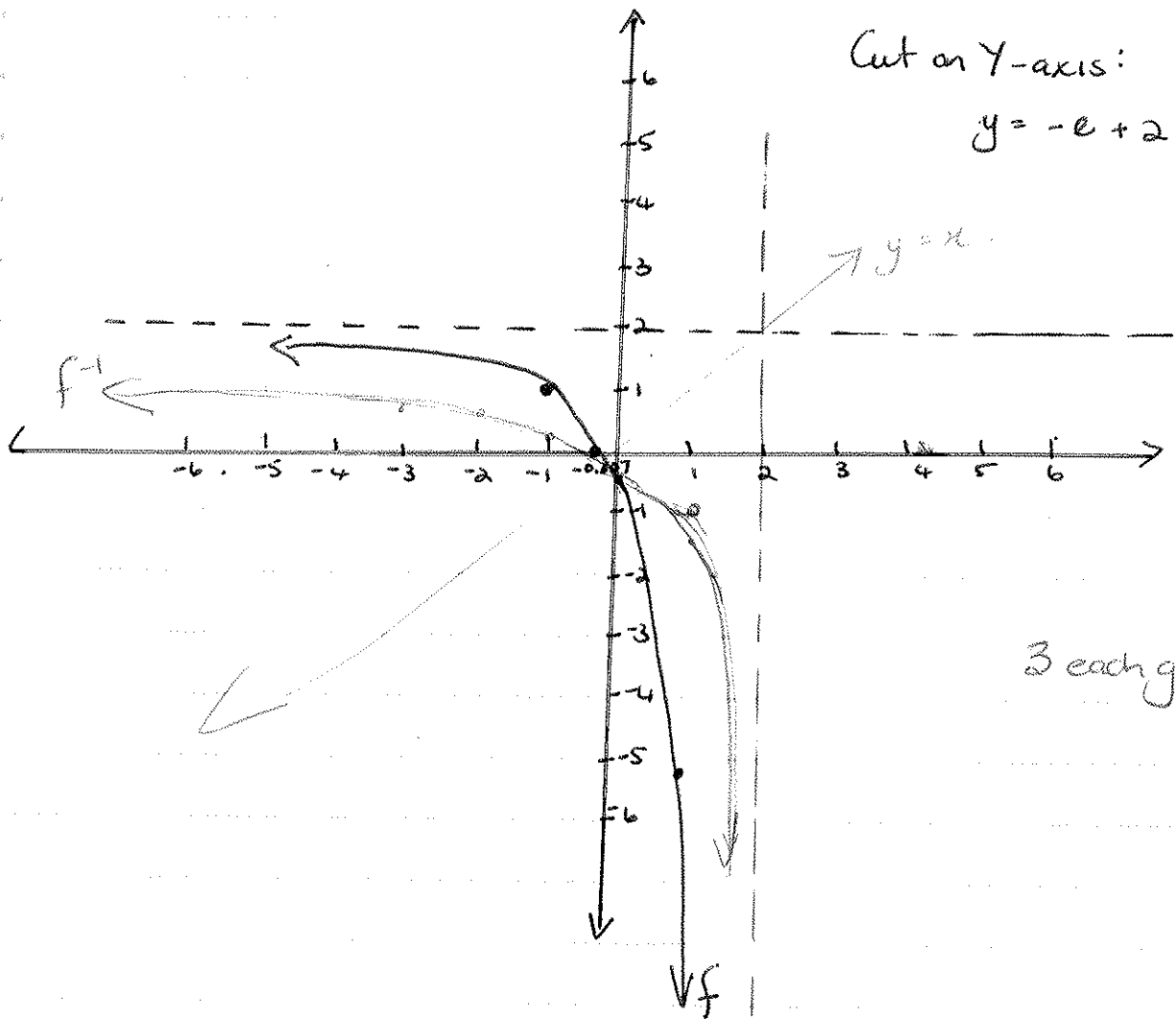
$$e^{x+1} = 2$$

$$x+1 = \ln 2$$

$$x = \ln 2 - 1 \approx -0.307$$

Cut on Y-axis:

$$y = -e + 2 \approx -0.3$$



3 each graph.

b) $y = -e^{x+1} + 2$
 $\ln x = -e^{y+1} + 2$ ✓

$$x - 2 = -e^{y+1}$$

$$2 - x = e^{y+1}$$
 ✓

$$\ln(2-x) = y+1$$

$$y = \ln(2-x) - 1$$
 ✓

$$\therefore f^{-1}(x) = \ln(2-x) - 1$$

(3)

c) Domain: $x \in \mathbb{R}$ ✓
 Range: $y < 2$ ✓

(2)

Question 7

a) x int. let $y=0$:

$$0 = \frac{x^2 + 2x + 1}{x-1}$$

$$\therefore 0 = x^2 + 2x + 1$$

$$0 = (x+1)(x+1) \quad \text{③}$$

$$\therefore \underline{x = -1}$$

y int let $x=0$:

$$y = \frac{1}{-1} = -1 \quad \text{②}$$

b) Vertical Asymptote :

$$x=1 \quad \checkmark \checkmark \quad \text{②}$$

Horizontal Asymptote :

$$y = \lim_{x \rightarrow \infty} \frac{x^2 + 2x + 1}{x-1} \quad \div \text{ by } x^2$$

$$= \lim_{x \rightarrow \infty} \frac{1 + \frac{2}{x} + \frac{1}{x^2}}{\frac{1}{x} - \frac{1}{x^2}}$$

Doesn't exist

\therefore No horizontal asymptote.

Oblique. :

$$x-1 \overline{) x^2 + 2x + 1}$$

$$3x + 1$$

$$3x - 3$$

$$4$$

\therefore Oblique asymptote $y = x + 3$ $\checkmark \checkmark$

c) $f'(x) = \frac{(x-1)(2x+2) - (x^2+2x+1)(1)}{(x-1)^2}$ $\checkmark \checkmark$

$$= \frac{2x^2 + 2x - 2x - 2 - x^2 - 2x - 1}{(x-1)^2}$$

$$= \frac{x^2 - 2x - 3}{(x-1)^2} = \frac{(x+1)(x-3)}{(x-1)^2} = \frac{(x+1)(x-3)}{(x-1)^2} \quad \checkmark \checkmark$$

④

⑤

d) Stationary pts: $f'(x) = 0$ ✓

$$\frac{(x+1)(x-3)}{(x-1)^2} = 0$$

∴ At $x = -1$ ✓ or $x = 3$. ✓
↙ $y = 0$ ✓ ↘ $y = 8$. ✓

$(-1; 0)$

$(3; 8)$

$$f''(x) = \frac{(x-1)^2(2x-2) - (x^2-2x-3)2(x-1)}{(x-1)^4} ✓$$

$$f''(-1) = \frac{4(-4) - (1+2-3)2(-2)}{(-2)^4} = \frac{-16+0}{16} = -1 ✓$$

∴ local max.

∴ $(-1, 0)$ local max. ✓

$(3; 8)$

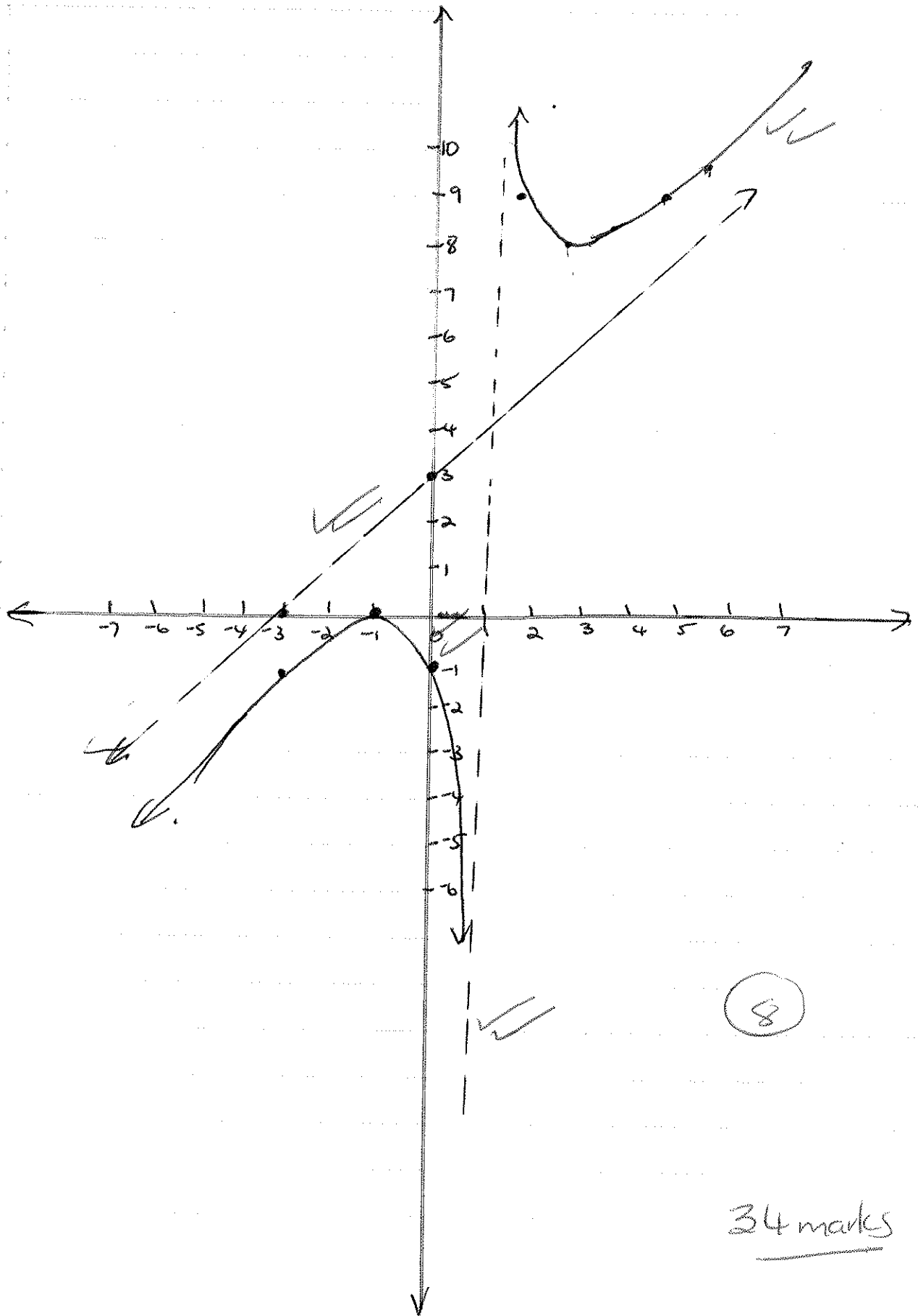
$$f''(3) = \frac{4(4) - (9-6-3)2(3-1)}{(3-1)^4}$$

$$= \frac{16}{16}$$

$$= 1 > 0 \quad \text{local min}$$

∴ $(3, 8)$ local min. ✓





8

34 marks

Question 8

$$a) \int_{-1}^2 \left(\frac{1}{x^3} + 1 \right) dx$$

$$= \int_{-1}^2 \left(x^{-3} + 1 \right) dx$$

$$= \left[-\frac{1}{2} x^{-2} + x \right]_{-1}^2$$

$$= -\frac{1}{2} (2)^{-2} + 2 - \left[-\frac{1}{2} (-1)^{-2} + (-1) \right]$$

$$= -\frac{1}{8} + 2 - \left[-\frac{1}{2} - 1 \right]$$

$$= \frac{15}{8} + \frac{1}{2} + 1$$

$$= \frac{15+4+8}{8}$$

$$= \frac{27}{8}$$

6

$$b) \int \frac{4x}{\sqrt{4-x^2}} dx$$

let $u = 4-x^2$

$$\frac{du}{dx} = -2x dx$$

$$-\frac{1}{2} du = x dx$$

$$= \int \frac{4 \cdot -\frac{1}{2} du}{\sqrt{u}}$$

$$= \int -2 u^{-\frac{1}{2}} du$$

$$= -4 u^{\frac{1}{2}} + C$$

$$= -4 (4-x^2)^{\frac{1}{2}} + C$$

$$= -4 \sqrt{4-x^2} + C$$

8

$$c) \int \sin 4x \cos 3x dx$$

$$\sin A \cos B = \frac{1}{2} [\sin(A+B) + \sin(A-B)]$$

$$= \frac{1}{2} \int (\sin 7x + \sin x) dx$$

$$= \frac{1}{2} \left[-\frac{1}{7} \cos 7x - \cos x \right] + C$$

$$= -\frac{1}{14} \cos 7x - \frac{1}{2} \cos x + C$$

7

Question 9

$$DC^2 = r^2 + r^2 - 2r \cdot r \cos \theta$$

$$= 2r^2 - 2r^2 \cos \theta = 2r^2(1 - \cos \theta)$$

a) Area shaded seg = $\frac{1}{2} r^2 \theta - \frac{1}{2} r \cdot r \cdot \sin \theta$

$$= \frac{1}{2} r^2 \theta - \frac{1}{2} r^2 \sin \theta$$

Area of square
= DC x DC
= $2r^2(1 - \cos \theta)$

$$8\left(\frac{1}{2} r^2 \theta - \frac{1}{2} r^2 \sin \theta\right) = 2r^2(1 - \cos \theta)$$

$$4r^2 \theta - 4r^2 \sin \theta = 2r^2 \Rightarrow 2r^2 \cos \theta$$

$$\div 2r^2$$

$$2\theta - 2 \sin \theta = 1 - \cos \theta$$

$$2\theta - 2 \sin \theta + \cos \theta - 1 = 0$$

8

b) i) $2\theta - 2 \sin \theta + \cos \theta - 1$

$$= 2(1) - 2 \sin 1 + \cos 1 - 1$$

$$= -0,1426$$

2

ii) $2(2) - 2 \sin 2 + \cos 2 - 1$

$$= 0,7652$$

2

c) Guess 1,5

$$x_{r+1} = x_r - \frac{f(x_r)}{f'(x_r)}$$

$$= x_r - \frac{2x_r - 2 \sin x_r + \cos x_r - 1}{2 - 2 \cos x_r - \sin x_r}$$

6

$$x_1 = 1,5$$

$$x_4 = 1,4013$$

$$x_2 = 1,412$$

$$x_5 = 1,40134$$

$$x_3 = 1,4015$$

Question 10

a) $TS^2 + 2^2 = x^2$ ✓
 $TS^2 = x^2 - 4$
 $TS = \sqrt{x^2 - 4}$

SH = 6 - \sqrt{x^2 - 4} km

✓ (2)

b) time is $\frac{\text{dist}}{\text{speed}}$.

$t = \text{time} = \frac{x}{3} + \frac{6 - \sqrt{x^2 - 4}}{5} = \frac{1}{3}x + \frac{6}{5} - \frac{1}{5}(x^2 - 4)^{1/2}$ ✓ ✓

min time will happen if $t' = 0$ ✓

$\frac{1}{3} - \frac{1}{10}(x^2 - 4)^{-1/2} \cdot 2x = 0$ ✓ ✓

$\frac{1}{3} - \frac{x}{5\sqrt{x^2 - 4}} = 0$ ✓

$5\sqrt{x^2 - 4} - 3x = 0$

$5\sqrt{x^2 - 4} = 3x$

$25(x^2 - 4) = 9x^2$ ✓

$25x^2 - 100 = 9x^2$

$16x^2 = 100$

$x^2 = \frac{100}{16}$

$x = \frac{10}{4}$ ✓

$= 2,5 \text{ km}$

(10)

Remarks

SECTION B

Question 1

$$a) P(A|B) = \frac{P(A \cap B)}{P(B)}$$

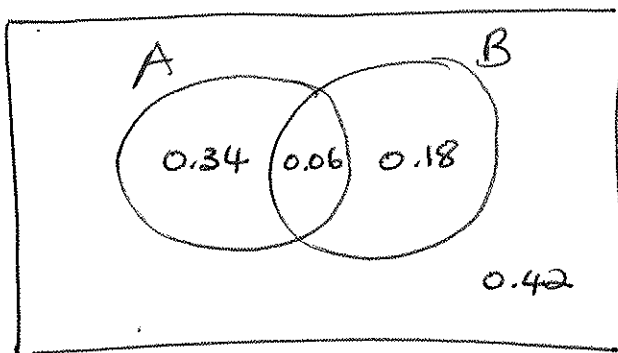
$$0,25 = \frac{P(A \cap B)}{0,24} \quad \checkmark$$

$$P(A \cap B) = 0,24 \times 0,25 \quad \checkmark$$

$$= \underline{0,06}$$

(2)

b)



$$i) p(\text{at least one event occurs}) = 1 - 0,42 \quad \checkmark$$
$$= \underline{0,58} \quad \checkmark$$

(2)

$$ii) p(\text{exactly one event occurs}) = 0,34 + 0,18 \quad \checkmark$$
$$= 0,52 \quad \checkmark$$

(3)

$$iii) P(B|A) = \frac{P(A \cap B)}{P(A)} \quad \checkmark = \frac{0,06}{0,4} = 0,15 \quad \checkmark$$

(3)

OR $\frac{0,06}{0,4}$ from Venn.

$$c) P(A) \times P(B) = 0,4 \times 0,24 = 0,096 \quad \checkmark$$

$$P(A \cap B) = 0,06 \quad \checkmark$$

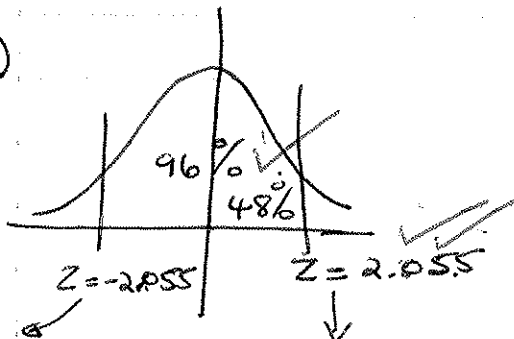
(3)

$$\therefore P(A) \times P(B) \neq P(A \cap B)$$

\therefore events are not independent

Question 2

a)



$$X = 0$$

$$X = \dots$$

$$z = \frac{x - \mu}{\frac{\sigma}{\sqrt{n}}}$$

$$z\sigma = x - \mu$$

$$\mu = x \pm \frac{z\sigma}{\sqrt{n}}$$

$$\mu = 0.982 \pm 2.055 \times \frac{0.068}{\sqrt{20}}$$

$$0.9508 \leq \mu \leq 1.0132 \text{ l.}$$

8

b) No, mostly they will have slightly more or less than like in a bottle but the avg amount (2) of wine will be l.

$$\frac{\binom{15}{1} \binom{10}{1} \binom{5}{1}}{\binom{30}{3}}$$

$$= \frac{75}{406} = 0.1847$$

10

20 marks

Question 3

$$a) \binom{12}{7} (0.4)^7 (0.6)^5$$

$$= 0.1009$$

7

$$b). p = 1 - \frac{\binom{12}{0} \binom{78}{5}}{\binom{90}{5}}$$

$$= 1 - 0.48$$

$$= 0.52$$

7

14 marks.

Question 4

$$a) \int_0^3 k(3x^2 - x^3) = 1 \quad \checkmark$$

$$k \left[x^3 - \frac{1}{4}x^4 \right]_0^3 = 1$$

$$k \left[27 - \frac{81}{4} \right] = 1$$

$$k = \frac{1}{\left[27 - \frac{81}{4} \right]}$$

$$= \frac{1}{\frac{108 - 81}{4}}$$

$$= \frac{4}{27}$$

(8)

$$b) f(x) = \frac{4}{27} (3x^2 - x^3) \quad \checkmark$$
$$= \frac{12}{27} x^2 - \frac{4}{27} x^3$$

Mode will be when $f'(x) = 0$ \checkmark

$$\frac{24}{27} x - \frac{12}{27} x^2 = 0$$

(6)

$$24x - 12x^2 = 0 \quad \checkmark$$

$$12x(2 - x) = 0 \quad \checkmark$$

$$x = 0 \quad \text{or} \quad x = 2$$

N/A

\therefore mode will be at $x = 2$.

$$c) \int_0^m \frac{4}{27} (3x^2 - x^3) = 0.5 \quad \checkmark$$

$$\int_0^m (3x^2 - x^3) = \frac{27}{8}$$

$$\left[x^3 - \frac{1}{4}x^4 \right]_0^m = \frac{27}{8}$$

$$m^3 - \frac{1}{4}m^4 = \frac{27}{8}$$

$$8m^3 - 2m^4 = 27$$

(5)

19 marks

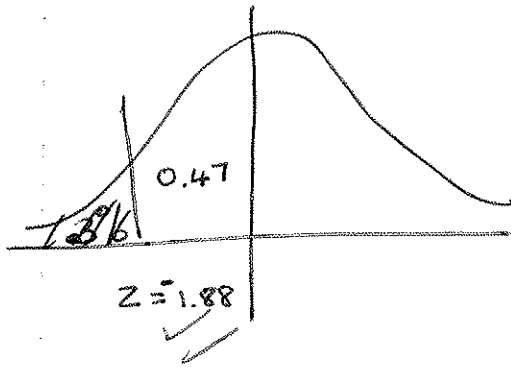
Question 6

$$\mu = 30$$

$$\sigma^2 = 2,54$$

$$H_0: \mu = 30 \quad \checkmark$$

$$H_1: \mu < 30. \quad \checkmark$$



$$z = \frac{\bar{X} - \mu}{\frac{\sigma}{\sqrt{n}}}$$
$$= \frac{28,8 - 30}{\frac{\sqrt{2,54}}{\sqrt{8}}}$$

$$= -2,1296 \quad \checkmark \checkmark$$

There is sufficient evidence to reject null hypothesis in favour of claim. \therefore Therefore there is cause for complaint. $\checkmark \checkmark$

(12)

Question 5

a) $\bar{x} = 66$

$$\sum x_i = 990$$

$$\bar{x} = \frac{\sum x_i}{n}$$

$$66 = \frac{990}{n}$$

$$n = \frac{990}{66} = 15 \checkmark \textcircled{2}$$

b) $\bar{y} = \frac{982}{15} = 65.47 \checkmark \textcircled{2}$

c) $b = \frac{n \sum(xy) - \sum x \sum y}{n(\sum x^2) - (\sum x)^2}$ or $b = \frac{\sum xy - n\bar{x}\bar{y}}{\sum x^2 - n(\bar{x})^2}$

$$= \frac{15(67680) - (990)(982)}{15(68900) - (990)^2} \checkmark$$

$$= \frac{1015200 - 972180}{1033500 - 980100} \checkmark$$

$$= 0,8056 \checkmark \textcircled{6}$$

$$b = \frac{67680 - 15(66)(65.47)}{68900 - 15(66)^2}$$

$$= 0,8047$$

because of
rounding

without rounding

$$= 0.8056$$

$$y - \left(\frac{982}{15}\right) = 0.8056(x - 66) \checkmark \textcircled{2}$$

$$\underline{y = 0.8056x + 12.2971}$$

d) $y = 55,7995$ ✓ (2)

e) $s_x^2 = \frac{\sum x_i^2}{n} - \bar{x}^2 = \frac{68900}{15} - (66)^2 = \frac{712}{3}$ ✓
 $\therefore s_x = 15,4056$

$s_y^2 = \frac{\sum y_i^2}{n} - \bar{y}^2 = \frac{67038}{15} - \left(\frac{982}{15}\right)^2$
 $= 183,3315$ ✓
 $s_y = 13,5394$

$\therefore r = b \times \frac{s_x}{s_y}$

$r = 0,8056 \times \frac{15,4056}{13,5394}$ ✓

$= \underline{0,9166}$ ✓

(4)

f) Very strong positive linear correlation. ✓ (2)

g) It would be accurate because of the strong positive correlation coefficient. ✓ (2)